

1. Match the two columns and select the correct option.

Adult	Babies
Lion	Cub
Tiger	Colt
Horse	Cygnets

- A. Lion - Cub; Tiger - Cub; Horse - Colt
- B. Lion - Colt; Tiger - Cub; Horse - Cygnets
- C. Lion - Cub; Tiger - Colt; Horse - Cygnets
- D. Lion - Cub; Tiger - Cygnets; Horse - Cygnets

Answer:: A

[YagnaQRefNo: 9-24] [Q Level: Unknown] [1: Animals]

2. Which of the following animals directly give birth to young ones without producing eggs ?



Answer:: C

[YagnaQRefNo: 9-21] [Q Level: Unknown] [1: Animals]

3. The whale which is the largest mammal does not have

- A. Eyes
- B. Legs
- C. Fins
- D. Teeth

Answer:: B

[YagnaQRefNo: 9-14] [Q Level: Unknown] [1: Animals]

4. Which of the following statements is true for spices?

- A. Spices are dried plant products
- B. Spices are obtained from both plants and animals
- C. Spices make our food tasty
- D. Both (A) & (C)

Answer:: D

[YagnaQRefNo: A-3] [Q Level: Unknown] [2: Plants]





5. Plants grow better when there is and

- A. Water, storm
- B. Snow, rain
- C. No sunlight, water
- D. Water, air

Answer:: D

[YagnaQRefNo: A-10] [Q Level: Unknown] [2: Plants ]

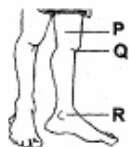
6. Oil is NOT obtained from

- A.  Jute
- B.  Sunflower
- C.  Mustard
- D.  Coconut

Answer:: A

[YagnaQRefNo: A-8] [Q Level: Unknown] [2: Plants ]

7. Given figure represents legs of a human body. Label the parts P, Q and R.



- A. P - knee, Q - ankle, R - foot
- B. P - ankle, Q - knee, R - thigh
- C. P - thigh, Q - knee, R - ankle
- D. P - foot, Q - ankle, R - knee

Answer:: C

[YagnaQRefNo: B-3] [Q Level: Unknown] [3: Human Body]

8. Gita touched the leaves of a Mimosa plant and they closed. Which of the following body parts helped Gita to identify that the leaves are closed?



- A. Nose
- B. Fingers

- C. Eyes
- D. Ears

Answer:: C

[YagnaQRefNo: B-10] [Q Level: Unknown] [3: Human Body]

9. Which of yours sense organ would not help you to find any difference between these two given objects ?



- A. Skin
- B. Eyes
- C. Ears
- D. Tongue

Answer:: C

[YagnaQRefNo: B-8] [Q Level: Unknown] [3: Human Body]

10. Which one of the following is inedible?




Cucumber

A.




Tomato

B.



Coconut

C.



Pong Pong

D.


Answer:: D

[YagnaQRefNo: C-6] [Q Level: Unknown] [4: Food]

11. Which of the following contains very low value calories?



A.



B.



C.



D.

Answer:: C

[YagnaQRefNo: C-7] [Q Level: Unknown] [4: Food]

12. Vipul ate some unhygienic food (as shown in the figure) for dinner. What will happen to Vipul ?



- A. Vipul will feel more energetic
- B. Vipul will vomit
- C. Vipul will feel more hungry
- D. All of the above

Answer:: B

[YagnaQRefNo: C-9] [Q Level: Unknown] [4: Food]

13. When the thread is made into cloth on a loom, the process is called

- A. Spinning
- B. Weaving
- C. Knitting
- D. Ginning

Answer:: B

[YagnaQRefNo: D-19] [Q Level: Unknown] [5: Clothes]


14. Weaving is

- A. Separating seeds from cotton bolls
- B. Spinning of yarn
- C. Arranging two sets of yarn together to make a fabric
- D. Immersing stems of jute plant in water

Answer:: C

[YagnaQRefNo: D-7] [Q Level: Unknown] [5: Clothes]

15. In which of the following weather condition, we would wear a woolen jacket?




A.



B.



C.




D.

Answer:: B

[YagnaQRefNo: D-18] [Q Level: Unknown]

[5: Clothes]

16. Below are all household articles except



A.



B.



C.



D.

Answer:: D

[YagnaQRefNo: E-1] [Q Level: Unknown]

[6: House and House Makers]

17. Which one of the following is a correct match ?

<b>A.</b> Column I	Column II
Guests are welcomed in	Dining room

<b>B.</b> Column I	Column II
We study in	Drawing room

<b>C.</b> Column I	Column II
We eat food in	Kitchen

<b>D.</b> Column I	Column II

We sleep in	Bed room
-------------	----------

Answer:: D

[YagnaQRefNo: E-17] [Q Level: Unknown] [6: House and House Makers]

18. Which of the following is a temporary house?

- A. Tent
- B. Caravan
- C. House boat
- D. All of these

Answer:: D

[YagnaQRefNo: E-11] [Q Level: Unknown] [6: House and House Makers]

19. We sing ----- songs on the Republic Day and Independence Day

- A. Sad
- B. Bad
- C. Film
- D. Patriotic

Answer:: D

[YagnaQRefNo: F-4] [Q Level: Unknown] [7 : Occasions and Festivals]

20. Eid is celebrated in a year as

- A. Eid-ul-Fitr
- B. Eid-ul-Zuha
- C. Eid-ul-Milad
- D. All of these

Answer:: D

[YagnaQRefNo: F-14] [Q Level: Unknown] [7 : Occasions and Festivals]

21. What is the prayer of the Muslims called ?

- A. Aarti
- B. Nemaz
- C. Bhajan
- D. Azaan

Answer:: B

[YagnaQRefNo: F-11] [Q Level: Unknown] [7 : Occasions and Festivals]

22. Match the two columns and select the incorrect option

<b>A.</b> Column I	Column II
Grandfather's wife	Grandmother

<b>B.</b> Column I	Column II
Uncle's wife	Aunt

<b>C.</b> Column I	Column II
Mother's father	Grandfather

D. Column I	Column II
Uncle's son	Nephew

Answer:: D

[YagnaQRefNo: 10-4] [Q Level: Unknown] [8: Family]

23. Our ---- join us on special occasions

- A. Friends
- B. Neighbours
- C. Relatives
- D. All of these

Answer:: D

[YagnaQRefNo: 10-14] [Q Level: Unknown] [8: Family]

24. Which option will give you all the indoor activities?

- A. Ludo, carom, cycling
- B. Chess, table tennis, cricket
- C. Football, watching television, dancing
- D. Carom, chess, table tennis

Answer:: D

[YagnaQRefNo: 10-11] [Q Level: Unknown] [8: Family]




25. The person who is responsible for the content of the publication is called

- A. Student
- B. Professor
- C. Editor
- D. Photographer

Answer:: C

[YagnaQRefNo: 11-7] [Q Level: Unknown] [9: Occupation]

26. From the following men shown in figures, select the one whose job is to catch the thieves and maintain law and order

- A. 
- B. 
- C. 



D. **Answer:: C**  
**[YagnaQRefNo: 11-10] [Q Level: Unknown] [9: Occupation]**

27. Sheela wants to get her shirt sewed. She will go to a

- A. Designer
- B. Weaver
- C. Tailor
- D. Spinner

**Answer:: C**  
**[YagnaQRefNo: 11-4] [Q Level: Unknown] [9: Occupation]**

28. We all know that:

“Early to bed, early to rise, makes a man, healthy, wealthy and wise”. What should be the proper timings to wake up in the morning and to go to bed at night?

- A. 6 a.m. and 9 p.m
- B. 6 p.m. and 9 a.m
- C. 9 a.m. and 6 p.m
- D. 6 a.m. and 6 p.m

**Answer:: A**  
**[YagnaQRefNo: 12-7] [Q Level: Unknown] [10: Good Habits and Safety Rules]**

29. We should water the plants. Why?

- A. Because plants are our only friends
- B. They give us all the things
- C. To grow them very big
- D. To make them healthy

**Answer:: D**  
**[YagnaQRefNo: 12-10] [Q Level: Unknown] [10: Good Habits and Safety Rules]**

30. If my friend would gift me a pen then I must \_\_\_\_\_ him

- A. Make fun of
- B. Kick
- C. Thank
- D. Both (A) & (C)

**Answer:: C**  
**[YagnaQRefNo: 12-4] [Q Level: Unknown] [10: Good Habits and Safety Rules]**

31. Select the INCORRECT option from the following match

<b>A.</b> Column I	Column II
Urgent messages.	Letters

<b>B.</b>	Column II
Column I	



Telephone	STD, ISD
-----------	----------

<b>C.</b> Column I	Column II
Internet	Email

<b>D.</b> Column I	Column II
Picture news	T.V

**Answer:: A**

[YagnaQRefNo: 13-7] [Q Level: Unknown] [11: Communication and Transport]

32. Select the INCORRECT statement from the following

- A. Means of transport are the ways by which people and goods are carried from one place to the another
- B. Water transport is the costliest form of transport
- C. Fast means of transport have made the world much smaller
- D. Fast transports are of great help during the time of emergency

**Answer:: B**

[YagnaQRefNo: 13-10] [Q Level: Unknown] [11: Communication and Transport]

33. Which is the fastest mode of transport?

- A. Air
- B. Land
- C. Water
- D. None of these

**Answer:: A**

[YagnaQRefNo: 13-4] [Q Level: Unknown] [11: Communication and Transport]

34. Earth is called a blue planet because

- A. It is made of land and water
- B. Its sky appears blue in colour
- C. Its three-fourth part is covered with water
- D. Both (B) & (C)

**Answer:: C**

[YagnaQRefNo: 14-7] [Q Level: Unknown] [12 : Earth and Universe]

35. Which of the following correctly defines a solar system?

- A. A large object that orbits the Sun
- B. A cluster of planets that have no moons
- C. The thick atmosphere that presses down on the planets
- D. A group of objects in space that move around a central star

**Answer:: D**

[YagnaQRefNo: 14-10] [Q Level: Unknown] [12 : Earth and Universe]

36. Look at the pattern of numbers shown here

85 82 79 76 \_\_\_\_\_ ? \_\_\_\_\_

If the pattern continues in the same way, what will be the next number?

- A. 73

- B. 75
- C. 65
- D. 69

[YagnaQRefNo: 4-222] [Q Level: Unknown] **Answer:: A**  
[Mental Ability]

37. If  $9+4=13$ , then  $4+9=$

- A. 14
- B. 19
- C. 13
- D. 15

[YagnaQRefNo: 4-81] [Q Level: Unknown] **Answer:: C**  
[Mental Ability]

38. Nalu walks to school each day. He leaves home at 8:45 AM and arrives at the school playground at 9:04 AM. How many minutes does it take Nalu to walk to school ?

- A. 19 minutes
- B. 29 minutes
- C. 59 minutes
- D. 30 minutes

[YagnaQRefNo: 4-94] [Q Level: Unknown] **Answer:: A**  
[Mental Ability]

39. There are 9 girls and 6 boys in the team. Which number sentence tells how many children are there in the team?

- A.  $9 + 6 = 15$
- B.  $9 - 6 = 3$
- C.  $9 \times 6 = 54$
- D.  $9 + 3 = 3$

[YagnaQRefNo: 4-1] [Q Level: Unknown] **Answer:: A**  
[Mental Ability]

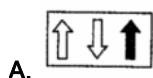
40. Which choice is the same as the number sentence shown below?

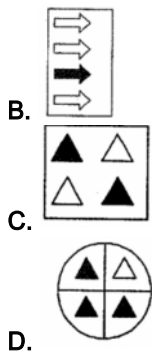
$$5+5+5+5+5+5+5+5+5=$$

- A.  $6 \times 5$
- B.  $7 \times 5$
- C.  $8 \times 5$
- D.  $9 \times 5$

[YagnaQRefNo: 4-166] [Q Level: Unknown] **Answer:: C**  
[Mental Ability]

41. Which of the following shows  $\frac{1}{2}$  shaded parts?





Answer:: C  
[Mental Ability]

[YagnaQRefNo: 4-216] [Q Level: Unknown]

42. Answer the following questions on the basis of the figures drawn in the box.



Number of sleeping lines are \_\_\_\_\_

- A. 8
- B. 11
- C. 13
- D. 16

Answer:: A  
[Mental Ability]

[YagnaQRefNo: 4-192] [Q Level: Unknown]

43. Which of the following number sentence is true, if we put (1, 2, 3, 4, 5) in the box?

- A.  $\square + 2 = 2$
- B.  $\square \times 2 = 2$
- C.  $\square + 0 = 0$
- D.  $\square \times 0 = 0$

Answer:: D  
[Mental Ability]

[YagnaQRefNo: 4-140] [Q Level: Unknown]

44. Mohit has Rs. 250. If he bought a toy aeroplane and a toy car, how much money is left with him now?

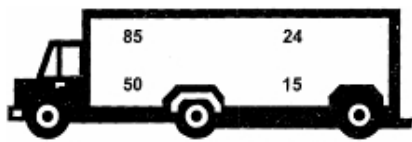


- A. Rs. 80
- B. Rs. 90
- C. Rs. 82
- D. Rs. 75

Answer:: A  
[Mental Ability]

[YagnaQRefNo: 4-307] [Q Level: Unknown]

45. What is the sum of all the numbers in a truck?



- A. 195
- B. 173
- C. 183
- D. 174

Answer:: D

[YagnaQRefNo: 4-34] [Q Level: Unknown] [Mental Ability]

46. John folded a paper in half and cut out the figure shown below:



What did John's figure look like when he unfolded it?

- A.
- B.
- C.
- D.

Answer:: B

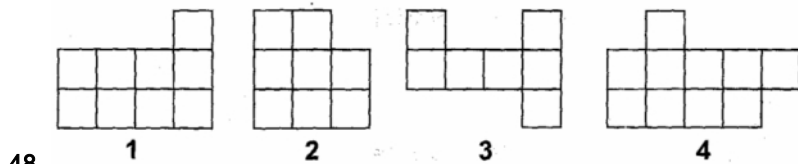
[YagnaQRefNo: 4-287] [Q Level: Unknown] [Mental Ability]

47. If each stands for 2 dolls, then stand for \_\_\_\_\_ dolls

- A. 5
- B. 8
- C. 10
- D. 12

Answer:: B

[YagnaQRefNo: 4-127] [Q Level: Unknown] [Mental Ability]



48. Shape \_\_\_\_\_ is made up of 7 squares

- A. 1
- B. 2
- C. 3

D. 4

Answer:: B

[YagnaQRefNo: 4-85] [Q Level: Unknown] [Mental Ability]

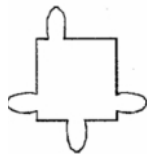
49. What is the easiest way to find  $27 + 69 + 1$ ?

- A. Add 27 and 1 first, then add 69 to the sum
- B. Add 69 and 1 first, then add 27 to the sum
- C. Add 69 and 27 first, then add 1 to the sum
- D. All of these

Answer:: B

[YagnaQRefNo: 4-153] [Q Level: Unknown] [Mental Ability]

50. How many straight lines are there in the figure?



- A. 8
- B. 7
- C. 6
- D. 9

Answer:: A

[YagnaQRefNo: 4-48] [Q Level: Unknown] [Mental Ability]

Yagna Innovation