


1. Match the two columns and select the correct option.

Adult	Babies
Lion	Cub
Tiger	Colt
Horse	Cygnets

- A. Lion - Cub; Tiger - Cub; Horse - Colt
- B. Lion - Colt; Tiger - Cub; Horse - Cygnet
- C. Lion - Cub; Tiger - Colt; Horse - Cygnet
- D. Lion - Cub; Tiger - Cygnet; Horse - Cygnet

2. Which of the following animals directly give birth to young ones without producing eggs ?



3. The whale which is the largest mammal does not have

- A. Eyes
- B. Legs
- C. Fins
- D. Teeth

4. Which of the following statements is true for spices?

- A. Spices are dried plant products
- B. Spices are obtained from both plants and animals
- C. Spices make our food tasty
- D. Both (A) & (C)

5. Plants grow better when there is and

- A. Water, storm
- B. Snow, rain
- C. No sunlight, water
- D. Water, air

6. Oil is NOT obtained from



A.



B.

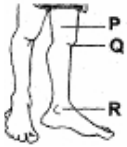


C.



D.

7. Given figure represents legs of a human body. Label the parts P, Q and R.



- A. P - knee, Q - ankle, R - foot
- B. P - ankle, Q - knee, R - thigh
- C. P - thigh, Q - knee, R - ankle
- D. P - foot, Q - ankle, R - knee

8. Gita touched the leaves of a Mimosa plant and they closed. Which of the following body parts helped Gita to identify that the leaves are closed?



- A. Nose
- B. Fingers
- C. Eyes
- D. Ears

9. Which of yours sense organ would not help you to find any difference between these two given objects ?




- A. Skin
- B. Eyes
- C. Ears
- D. Tongue

10. Which one of the following is inedible?



A. Cucumber



B. Tomato



C. Coconut




D. Pong Pong

11. Which of the following contains very low value calories?



A.



B.



C.



D.

12. Vipul ate some unhygienic food (as shown in the figure) for dinner. What will happen to Vipul ?



- A. Vipul will feel more energetic
- B. Vipul will vomit
- C. Vipul will feel more hungry
- D. All of the above


13. When the thread is made into cloth on a loom, the process is called

- A. Spinning
- B. Weaving
- C. Knitting
- D. Ginning

14. Weaving is

- A. Separating seeds from cotton bolls
- B. Spinning of yarn
- C. Arranging two sets of yarn together to make a fabric
- D. Immersing stems of jute plant in water

15. In which of the following weather condition, we would wear a woolen jacket?



A.



B.




C.



D.

16. Below are all household articles except



A.



B.



C.



D.

17. Which one of the following is a correct match ?

<b>A.</b> Column I	Column II
Guests are welcomed in	Dining room

<b>B.</b> Column I	Column II
We study in	Drawing room

<b>C.</b> Column I	Column II
We eat food in	Kitchen

<b>D.</b> Column I	Column II
We sleep in	Bed room

18. Which of the following is a temporary house?

- A. Tent
- B. Caravan
- C. House boat
- D. All of these

19. We sing ----- songs on the Republic Day and Independence Day

- A. Sad
- B. Bad
- C. Film
- D. Patriotic

20. Eid is celebrated in a year as

- A. Eid-ul-Fitr
- B. Eid-ul-Zuha
- C. Eid-ul-Milad
- D. All of these

21. What is the prayer of the Muslims called ?

- A. Aarti
- B. Nemaz
- C. Bhajan

D. Azaan

22. Match the two columns and select the incorrect option

<b>A.</b> Column I	Column II
Grandfather's wife	Grandmother

<b>B.</b> Column I	Column II
Uncle's wife	Aunt

<b>C.</b> Column I	Column II
Mother's father	Grandfather

<b>D.</b> Column I	Column II
Uncle's son	Nephew

23. Our ---- join us on special occasions

- A. Friends
- B. Neighbours
- C. Relatives
- D. All of these

24. Which option will give you all the indoor activities?

- A. Ludo, carom, cycling
- B. Chess, table tennis, cricket
- C. Football, watching television, dancing
- D. Carom, chess, table tennis

25. The person who is responsible for the content of the publication is called

- A. Student
- B. Professor
- C. Editor
- D. Photographer

26. From the following men shown in figures, select the one whose job is to catch the thieves and maintain law and order





C.



D.

27. Sheela wants to get her shirt sewed. She will go to a

- A. Designer
- B. Weaver
- C. Tailor
- D. Spinner

28. We all know that:

“Early to bed, early to rise, makes a man, healthy, wealthy and wise”. What should be the proper timings to wake up in the morning and to go to bed at night?

- A. 6 a.m. and 9 p.m
- B. 6 p.m. and 9 a.m
- C. 9 a.m. and 6 p.m
- D. 6 a.m. and 6 p.m

29. We should water the plants. Why?

- A. Because plants are our only friends
- B. They give us all the things
- C. To grow them very big
- D. To make them healthy

30. If my friend would gift me a pen then I must \_\_\_\_\_ him

- A. Make fun of
- B. Kick
- C. Thank
- D. Both (A) & (C)

31. Select the INCORRECT option from the following match

<b>A.</b> Column I	Column II
Urgent messages.	Letters

<b>B.</b>	Column II
Column I	
Telephone	STD, ISD

<b>C.</b>	Column II
Column I	
Internet	Email

D. Column I	Column II
Picture news	T.V

32. Select the INCORRECT statement from the following

- A. Means of transport are the ways by which people and goods are carried from one place to the another
- B. Water transport is the costliest form of transport
- C. Fast means of transport have made the world much smaller
- D. Fast transports are of great help during the time of emergency

33. Which is the fastest mode of transport?

- A. Air
- B. Land
- C. Water
- D. None of these

34. Earth is called a blue planet because

- A. It is made of land and water
- B. Its sky appears blue in colour
- C. Its three-fourth part is covered with water
- D. Both (B) & (C)

35. Which of the following correctly defines a solar system?

- A. A large object that orbits the Sun
- B. A cluster of planets that have no moons
- C. The thick atmosphere that presses down on the planets
- D. A group of objects in space that move around a central star

36. Look at the pattern of numbers shown here

85 82 79 76 \_\_\_\_\_? \_\_\_\_\_

If the pattern continues in the same way, what will be the next number?

- A. 73
- B. 75
- C. 65
- D. 69

37. If  $9+4=13$ , then  $4+9=$

- A. 14
- B. 19
- C. 13
- D. 15

38. Nalu walks to school each day. He leaves home at 8:45 AM and arrives at the school playground at 9:04 AM. How



many minutes does it take Nalu to walk to school ?

- A. 19 minutes
- B. 29 minutes
- C. 59 minutes
- D. 30 minutes

39. There are 9 girls and 6 boys in the team. Which number sentence tells how many children are there in the team?

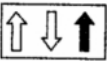

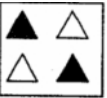

- A.  $9 + 6 = 15$
- B.  $9 - 6 = 3$
- C.  $9 \times 6 = 54$
- D.  $9 + 3 = 3$

40. Which choice is the same as the number sentence shown below?

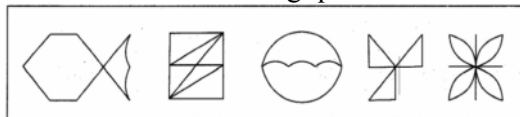
$$5+5+5+5+5+5+5+5+5=\square$$

- A.  $6 \times 5$
- B.  $7 \times 5$
- C.  $8 \times 5$
- D.  $9 \times 5$

41. Which of the following shows  $\frac{1}{2}$  shaded parts?

- A. 
- B. 
- C. 
- D. 

42. Answer the following questions on the basis of the figures drawn in the box.



Number of sleeping lines are \_\_\_\_\_

- A. 8
- B. 11
- C. 13
- D. 16

43. Which of the following number sentence is true, if we put (1, 2, 3, 4, 5) in the box?

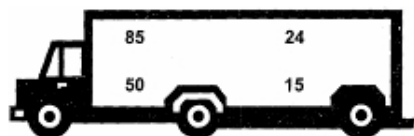
- A.  $\square + 2 = 2$
- B.  $\square \times 2 = 2$
- C.  $\square + 0 = 0$
- D.  $\square \times 0 = 0$

44. Mohit has Rs. 250. If he bought a toy aeroplane and a toy car, how much money is left with him now?



- A. Rs. 80
- B. Rs. 90
- C. Rs. 82
- D. Rs. 75

45. What is the sum of all the numbers in a truck?



- A. 195
- B. 173
- C. 183
- D. 174

46. John folded a paper in half and cut out the figure shown below:

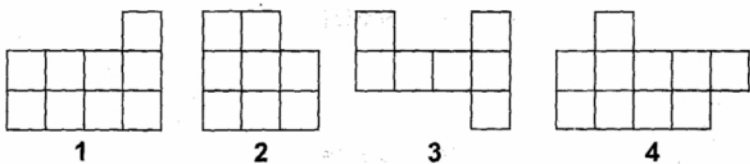


What did John's figure look like when he unfolded it?

- A.
- B.
- C.
- D.

47. If each  stands for 2 dolls, then  stand for \_\_\_\_\_ dolls

- A. 5
- B. 8
- C. 10
- D. 12



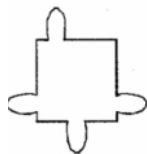
48. Shape \_\_\_\_\_ is made up of 7 squares

- A. 1
- B. 2
- C. 3
- D. 4

49. What is the easiest way to find  $27 + 69 + 1$ ?

- A. Add 27 and 1 first, then add 69 to the sum
- B. Add 69 and 1 first, then add 27 to the sum
- C. Add 69 and 27 first, then add 1 to the sum
- D. All of these

50. How many straight lines are there in the figure?



- A. 8
- B. 7
- C. 6
- D. 9

Yagna Innovation